

Reflections Practice

© 2013 Kuta Software LLC. All rights reserved.

Find the coordinates of the vertices of each figure after the given transformation.

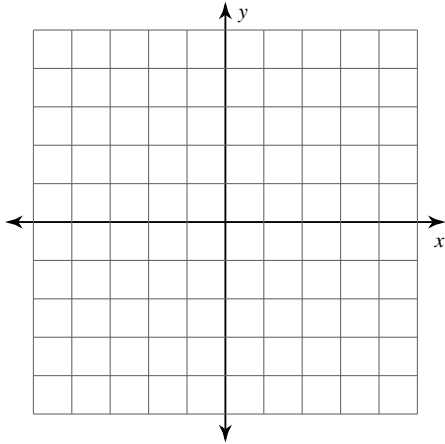
- 1) reflection across the x-axis
 $F(-5, -3), R(-3, 0), N(0, -1)$
- 2) reflection across the x-axis
 $B(-2, 1), S(-2, 2), R(3, 3), J(2, -2)$
- 3) reflection across the x-axis
 $M(0, -1), S(3, 2), Q(5, -3)$
- 4) reflection across the y-axis
 $V(3, -5), E(1, -2), F(3, 0), M(5, -2)$
- 5) reflection across the y-axis
 $B(1, 3), H(4, 4), D(4, -1)$
- 6) reflection across the x-axis
 $X(1, 0), K(4, 1), T(5, -3)$
- 7) reflection across the y-axis
 $R(-1, 0), L(-1, 1), X(3, -1), D(1, -3)$
- 8) reflection across the x-axis
 $W(0, 2), F(1, 5), E(4, 3), R(3, 0)$
- 9) reflection across the x-axis
 $U(4, 2), V(2, 4), I(3, 5), N(5, 4)$
- 10) reflection across the y-axis
 $J(-1, -3), A(-1, -1), P(0, 0), H(3, -2)$
- 11) reflection across the y-axis
 $I(-2, -5), U(-3, 0), D(-1, 1), K(-1, -4)$
- 12) reflection across the y-axis
 $P(0, 1), N(1, 3), T(3, 1), W(1, 0)$
- 13) reflection across the y-axis
 $B(3, -4), X(2, -1), M(5, 1)$
- 14) reflection across the y-axis
 $Y(-5, -5), L(-5, -4), V(-3, -1), F(-3, -3)$
- 15) reflection across the x-axis
 $X(-4, 2), J(-4, 4), E(-1, 3), Z(1, 0)$
- 16) reflection across the y-axis
 $T(-3, -4), U(1, -1), J(0, -5)$
- 17) reflection across the y-axis
 $M(-3, -5), Z(-3, -3), I(-2, -5)$
- 18) reflection across the y-axis
 $K(-4, 1), F(-5, 5), H(-2, 5), N(-2, 3)$

- 19) reflection across the y-axis
 $H(-3, 2), X(-3, 4), E(2, 2)$

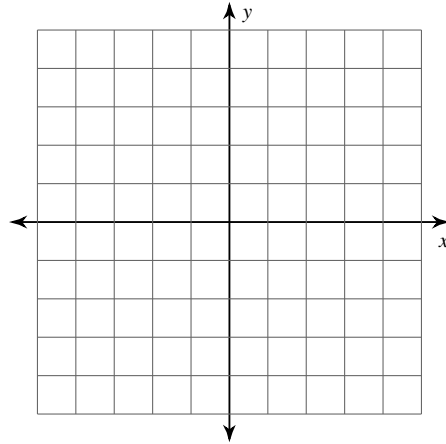
- 20) reflection across the x-axis
 $U(-4, -2), X(-2, 1), Z(1, 1), K(0, -4)$

Graph the image of the figure using the transformation given.

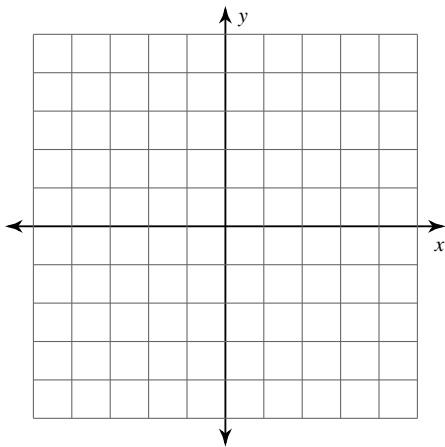
- 21) reflection across the y-axis
 $D(1, 0), T(0, 3), C(1, 3), B(4, -1)$



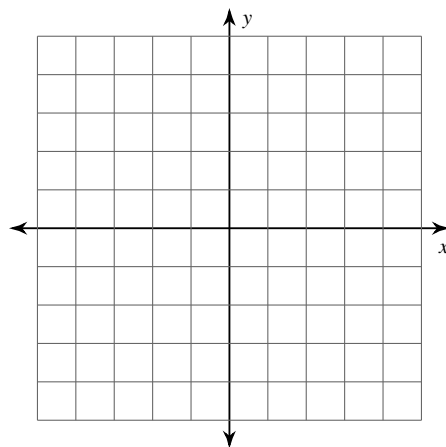
- 22) reflection across the x-axis
 $P(-4, -3), D(-4, -1), V(0, -2)$



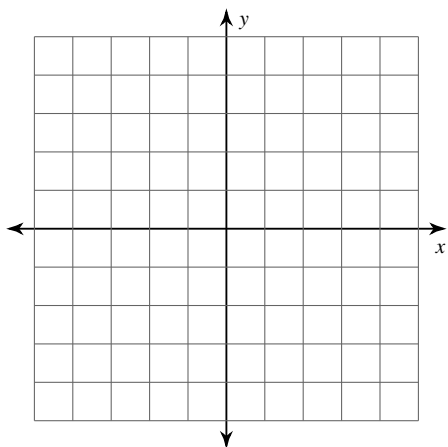
- 23) reflection across the y-axis
 $F(-5, 1), X(-3, 3), E(-1, -1)$



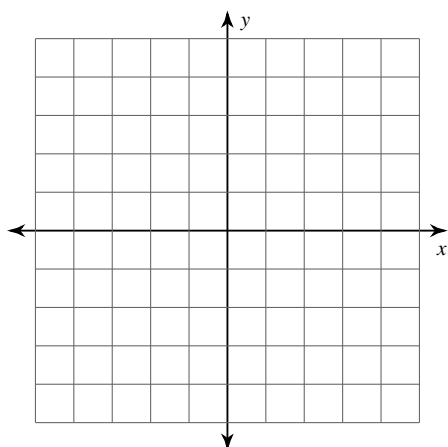
- 24) reflection across $x = -2$
 $S(-3, 0), V(0, 4), M(0, 1)$



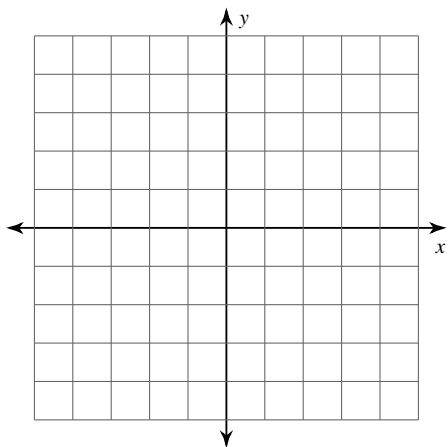
- 25) reflection across the y-axis
 $V(-3, -3), Y(-4, -1), W(-2, -1), S(-1, -2)$



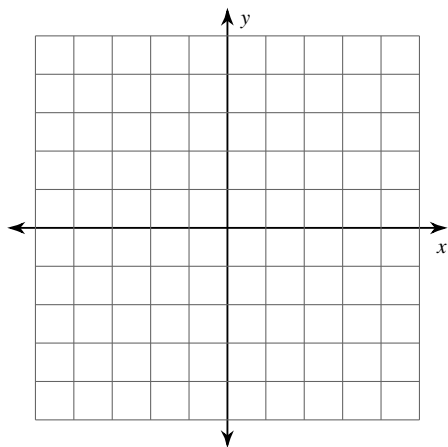
- 26) reflection across $y = -1$
 $T(2, -3), Z(3, -2), M(5, -4), D(5, -5)$



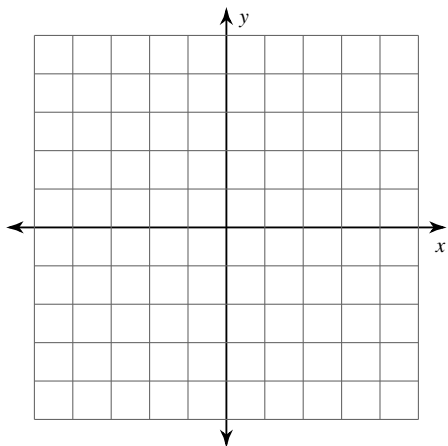
- 27) reflection across the x-axis
 $L(2, -5), B(1, -1), R(4, 0), C(5, -2)$



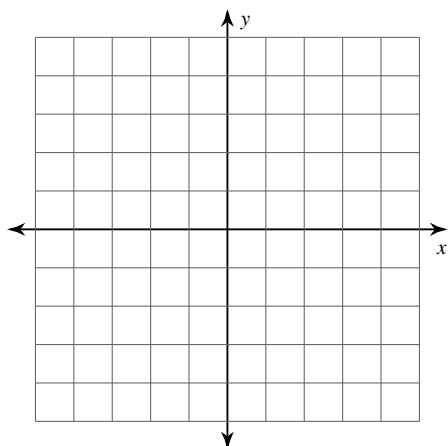
- 28) reflection across the y-axis
 $U(-2, -3), M(-2, 2), Z(3, 3), Y(3, -1)$



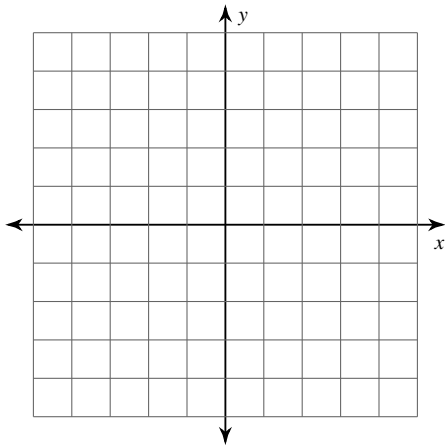
- 29) reflection across the y-axis
 $A(-5, 0), L(-4, 4), J(-1, 2)$



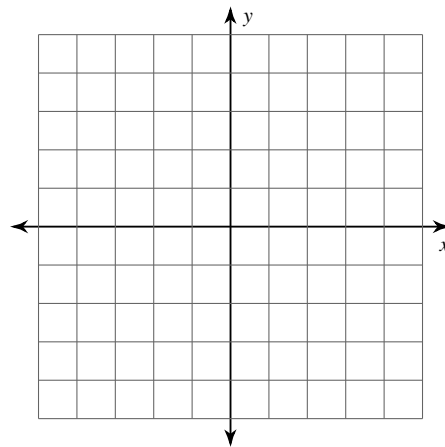
- 30) reflection across $y = -1$
 $S(1, -5), N(1, -2), V(4, -2), A(2, -5)$



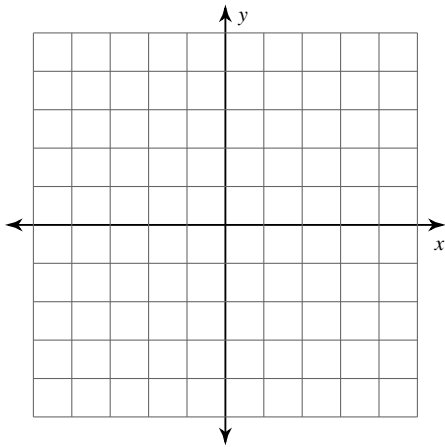
- 31) reflection across the y-axis
 $H(-3, -4), R(-3, 1), M(-1, 2), A(2, -2)$



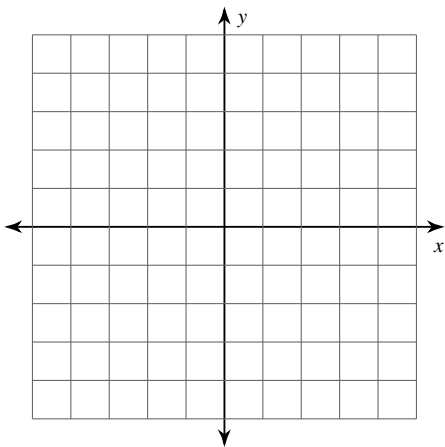
- 32) reflection across $y = -1$
 $U(-5, -4), Z(-2, -2), K(0, -4)$



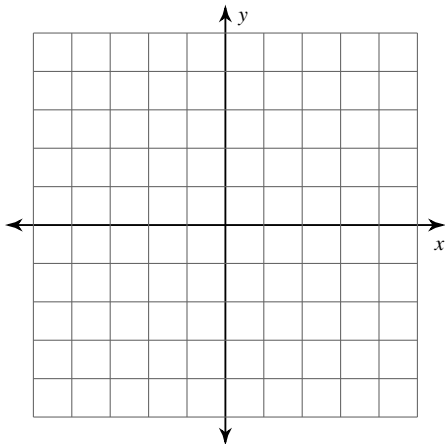
- 33) reflection across the x-axis
 $G(-3, 0), Z(-2, 5), C(-1, 2)$



- 34) reflection across $x = 1$
 $F(-2, -5), H(-3, -1), Q(1, -2)$



- 35) reflection across the y-axis
 $A(-4, -1), K(-5, 2), I(-4, 3), Q(-1, 3)$



- 36) reflection across $y = 1$
 $N(-4, 4), K(-3, 5), M(-3, 4), E(-4, 3)$

