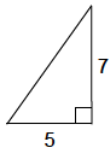


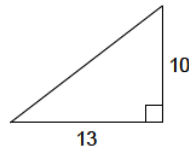
Pythagorean theorem - Integers - Find the missing hypotenuse

Length of the missing hypotenuse is:

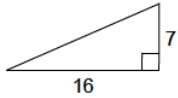
1)



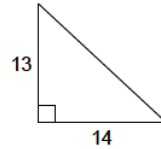
2)



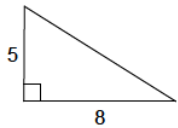
3)



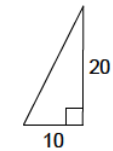
4)



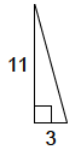
5)



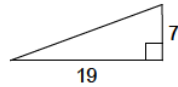
6)



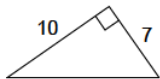
7)



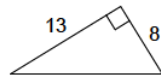
8)



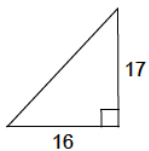
9)



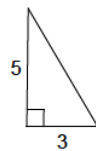
10)



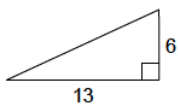
11)



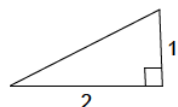
12)



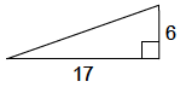
13)



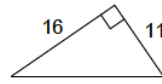
14)



15)



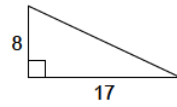
16)



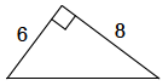
17)



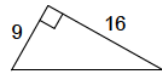
18)



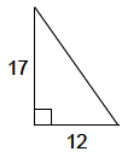
19)



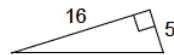
20)



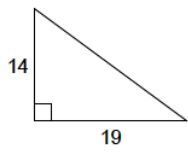
21)



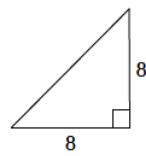
22)



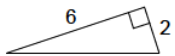
23)



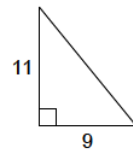
24)



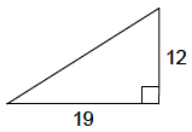
25)



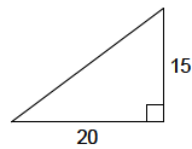
26)



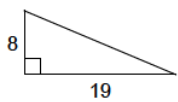
27)



28)



29)



30)

